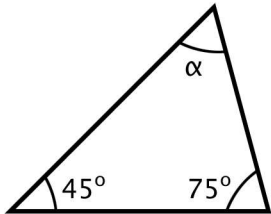


Geometry: Find the Missing Angle in the Triangles (Set 4)

Find the missing angle labelled α (alpha).

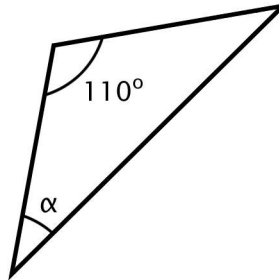


1. Scalene Triangle



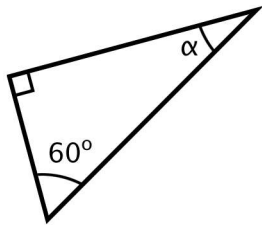
$\alpha =$ _____

2. Isosceles Triangle



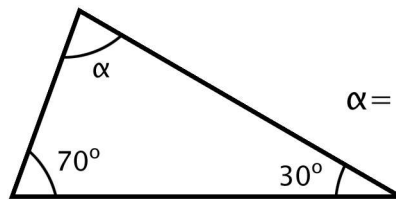
$\alpha =$ _____

3. Right Triangle



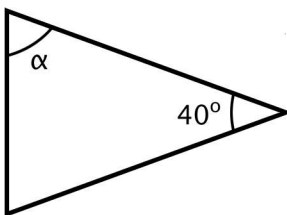
$\alpha =$ _____

4. Scalene Triangle



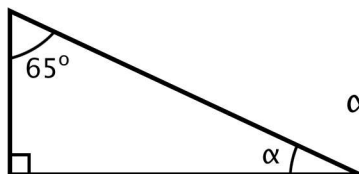
$\alpha =$ _____

5. Isosceles Triangle



$\alpha =$ _____

6. Right Triangle



$\alpha =$ _____

Name _____ Date _____

Geometry: Find the Missing Angle in the Triangles (Set 4)

Find the missing angle labelled α (alpha).



1. Scalene Triangle

60°

2. Isosceles Triangle

35°

3. Right Triangle

30°

4. Scalene Triangle

80°

5. Isosceles Triangle

70°

6. Right Triangle

25°