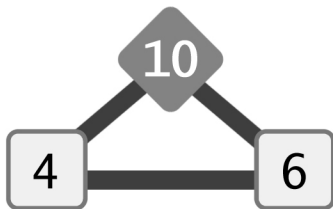


4

Fact Families Sums up to 10

Use the number sets to fill in the blanks and complete each fact family.

1)



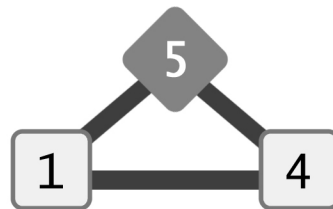
$$4 + 6 = \underline{\quad}$$

$$\underline{\quad} + 4 = 10$$

$$\underline{\quad} - 4 = 6$$

$$10 - \underline{\quad} = 4$$

2)



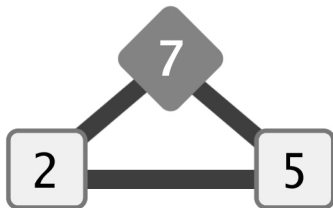
$$\underline{\quad} + 4 = 5$$

$$4 + 1 = \underline{\quad}$$

$$\underline{\quad} - 1 = 4$$

$$5 - 4 = \underline{\quad}$$

3)



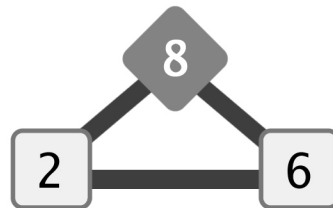
$$2 + 5 = \underline{\quad}$$

$$5 + \underline{\quad} = 7$$

$$7 - 2 = \underline{\quad}$$

$$\underline{\quad} - 5 = 2$$

4)



$$2 + \underline{\quad} = 8$$

$$6 + \underline{\quad} = 8$$

$$\underline{\quad} - 2 = 6$$

$$8 - 6 = \underline{\quad}$$