

Counting Money: Coins and Bills Greater than \$1 – Worksheet 2









Add the bills and coins in each box below and write the total in the blank.

 <p>1. \$ _____</p>	 <p>2. \$ _____</p>	 <p>3. \$ _____</p>
 <p>4. \$ _____</p>	 <p>5. \$ _____</p>	 <p>6. \$ _____</p>

Counting Money: Coins and Bills Greater than \$1 – Worksheet 2



Add the bills and coins in each box below and write the total in the blank.

 <p>1. \$ <u>20.16</u></p>	 <p>2. \$ <u>7.36</u></p>	 <p>3. \$ <u>16.35</u></p>
 <p>4. \$ <u>15.27</u></p>	 <p>5. \$ <u>12.16</u></p>	 <p>6. \$ <u>50.16</u></p>