








# Counting Money: Coins less than \$1. Ordered.



Match the set of coins to the dollar amount by placing the letter in the correct blank.

1. \$0.09 _____	A. 
2. \$0.46 _____	B. 
3. \$0.38 _____	C. 
4. \$0.47 _____	D. 
5. \$0.53 _____	E. 
6. \$0.66 _____	F. 
7. \$0.77 _____	G. 

# Counting Money: Coins less than \$1. Ordered.



Match the set of coins to the dollar amount by placing the letter in the correct blank.

1. \$.09   C  

A.



2. \$.46   D  

B.



3. \$.38   A  

C.



4. \$.47   G  

D.



5. \$.53   B  

E.



6. \$.66   F  

F.



7. \$.77   E  

G.

