

Fraction Addition: Write the fraction amount below the colored in pictures. Then color in the total amount in the blank one and write the fraction under it.



1. + =
 — + — = —

2. + =
 — + — = —

3. + =
 — + — = —

4. + =
 — + — = —

5. + =
 — + — = —

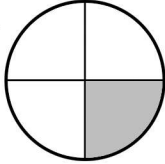
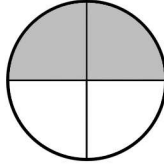
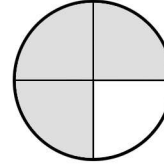
6. + =
 — + — = —

7. + =
 — + — = —

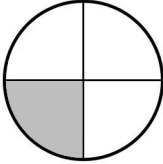
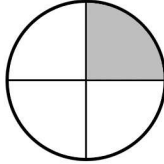
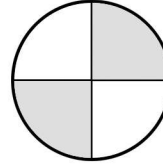
8. + =
 — + — = —

Fraction Addition: Write the fraction amount below the colored in pictures. Then color in the total amount in the blank one and write the fraction under it.

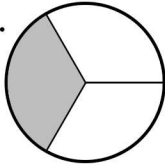
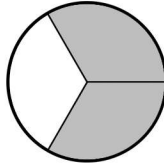
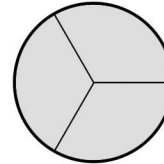


1.  +  = 

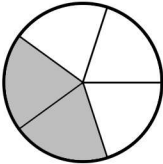
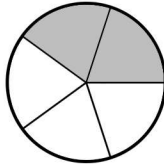
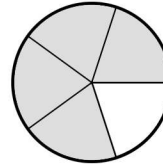
$$\frac{1}{4} + \frac{2}{4} = \frac{3}{4}$$

2.  +  = 

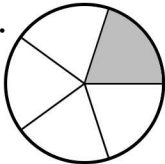
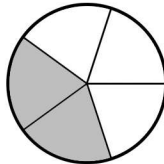
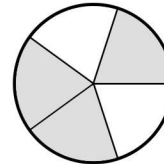
$$\frac{1}{4} + \frac{1}{4} = \frac{2}{4}$$

3.  +  = 

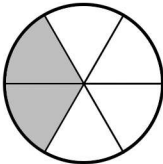
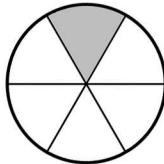
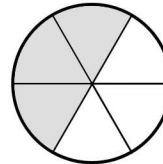
$$\frac{1}{3} + \frac{2}{3} = \frac{3}{3}$$

4.  +  = 

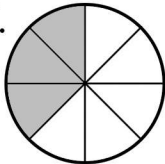
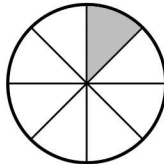
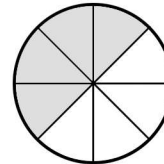
$$\frac{2}{5} + \frac{2}{5} = \frac{4}{5}$$

5.  +  = 

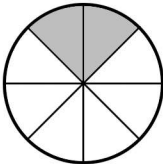
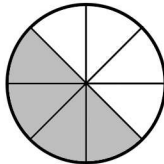
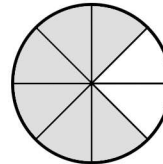
$$\frac{1}{5} + \frac{2}{5} = \frac{3}{5}$$

6.  +  = 

$$\frac{2}{6} + \frac{1}{6} = \frac{3}{6}$$

7.  +  = 

$$\frac{3}{8} + \frac{1}{8} = \frac{4}{8}$$

8.  +  = 

$$\frac{2}{8} + \frac{4}{8} = \frac{6}{8}$$