

Fraction Subtraction: Write the fraction amount below the colored in pictures. Then color in the remaining amount in the blank one and write the fraction under it.



1. - =
 _____ - _____ = _____

2. - =
 _____ - _____ = _____

3. - =
 _____ - _____ = _____

4. - =
 _____ - _____ = _____

5. - =
 _____ - _____ = _____

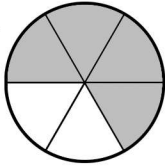
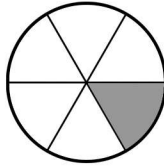
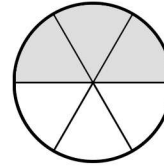
6. - =
 _____ - _____ = _____

7. - =
 _____ - _____ = _____

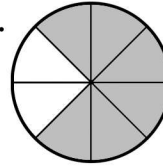
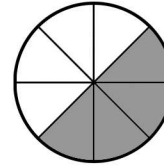
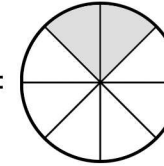
8. - =
 _____ - _____ = _____

Fraction Subtraction: Write the fraction amount below the colored in pictures. Then color in the remaining amount in the blank one and write the fraction under it.

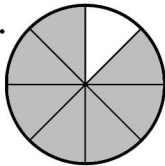
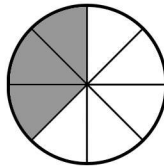
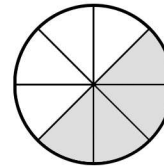


1.  -  = 

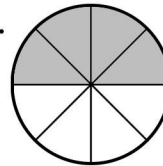
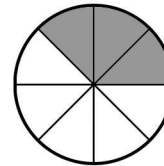
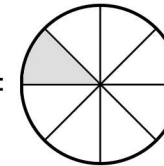
$$\frac{4}{6} - \frac{1}{6} = \frac{3}{6}$$

2.  -  = 

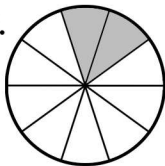
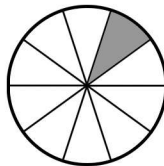
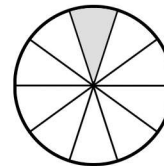
$$\frac{6}{8} - \frac{4}{8} = \frac{2}{8}$$

3.  -  = 

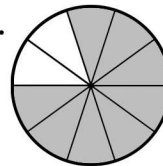
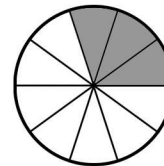
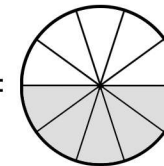
$$\frac{7}{8} - \frac{3}{8} = \frac{4}{8}$$

4.  -  = 

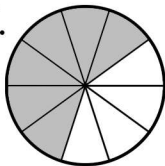
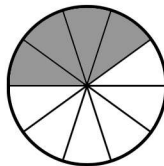
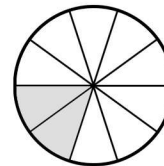
$$\frac{4}{8} - \frac{3}{8} = \frac{1}{8}$$

5.  -  = 

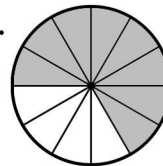
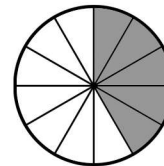
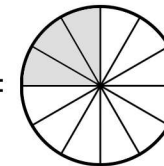
$$\frac{2}{10} - \frac{1}{10} = \frac{1}{10}$$

6.  -  = 

$$\frac{8}{10} - \frac{3}{10} = \frac{5}{10}$$

7.  -  = 

$$\frac{6}{10} - \frac{4}{10} = \frac{2}{10}$$

8.  -  = 

$$\frac{8}{12} - \frac{5}{12} = \frac{3}{12}$$