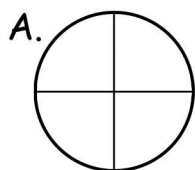


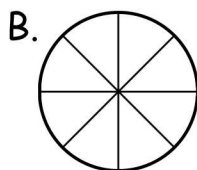
Name _____ Date _____

Coloring Fractions: Color in the correct fraction amounts.

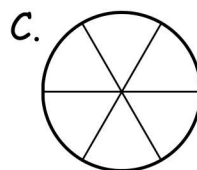
The number of slices is higher than the denominator.



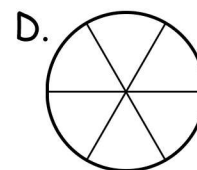
$$\frac{1}{2}$$



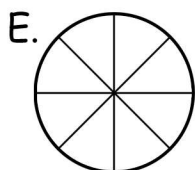
$$\frac{1}{4}$$



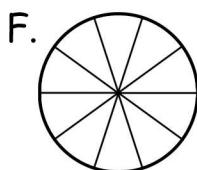
$$\frac{2}{3}$$



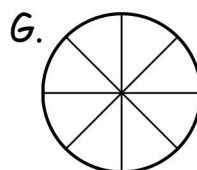
$$\frac{1}{2}$$



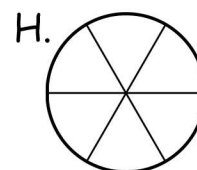
$$\frac{1}{4}$$




$$\frac{1}{2}$$



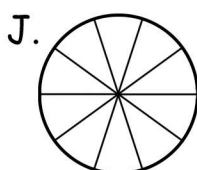
$$\frac{3}{4}$$



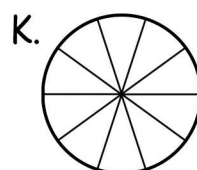
$$\frac{2}{3}$$




$$\frac{2}{3}$$



$$\frac{1}{5}$$



$$\frac{2}{5}$$



$$\frac{3}{4}$$