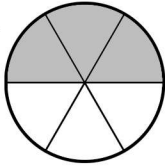
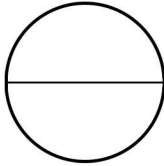
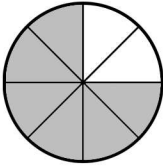
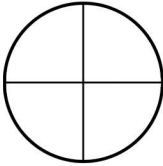
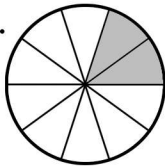
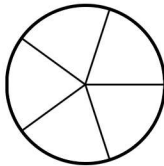


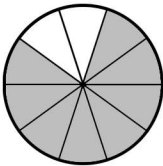
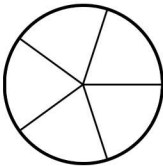
Simplifying Fractions: Write the fraction amount below the colored in picture. Then color in the equivalent simplified fraction amount and write the fraction below it.

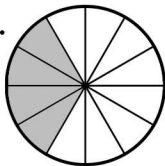
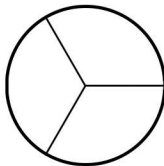


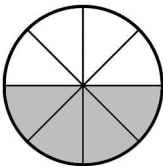
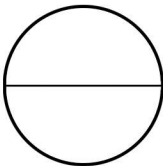
1.  $\xrightarrow{\text{Simplify}}$ 
 $\frac{3}{6}$ $\frac{1}{2}$

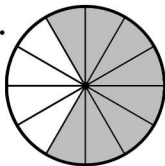
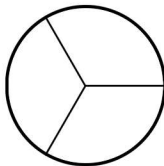
2.  $\xrightarrow{\text{Simplify}}$ 

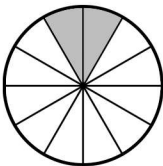
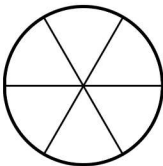
3.  $\xrightarrow{\text{Simplify}}$ 

4.  $\xrightarrow{\text{Simplify}}$ 

5.  $\xrightarrow{\text{Simplify}}$ 

6.  $\xrightarrow{\text{Simplify}}$ 

7.  $\xrightarrow{\text{Simplify}}$ 

8.  $\xrightarrow{\text{Simplify}}$ 

Simplifying Fractions: Write the fraction amount below the colored in picture. Then color in the equivalent simplified fraction amount and write the fraction below it.

