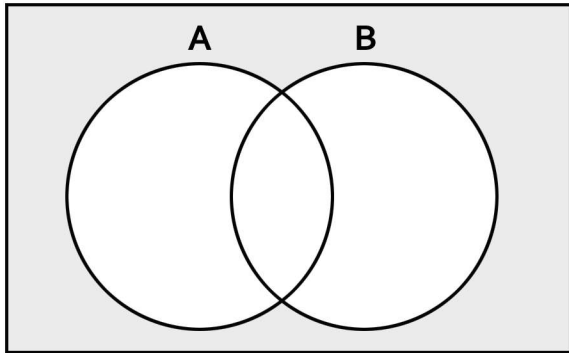


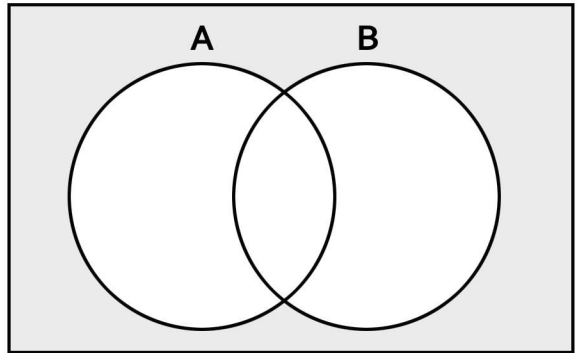
## Venn Diagrams

Fill out the Venn diagrams below using the sets A and B given in each problem.

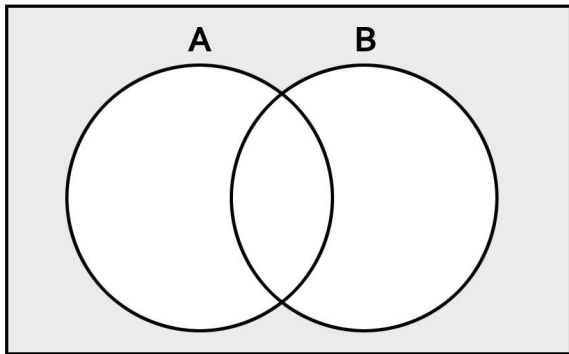
1)  $A: \{8, 9, 14, 20, 11\}$   $B: \{12, 20, 14, 4, 2\}$



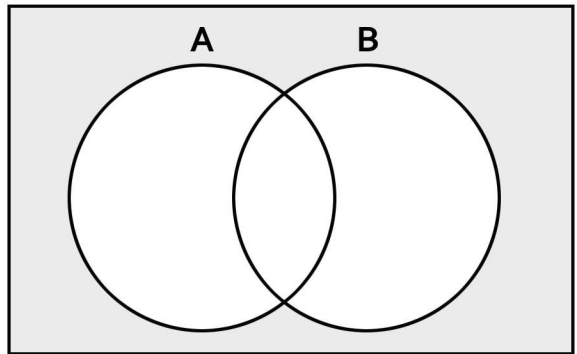
4)  $A: \{2, 17, 3, 9, 10\}$   $B: \{16, 9, 17, 19, 3\}$



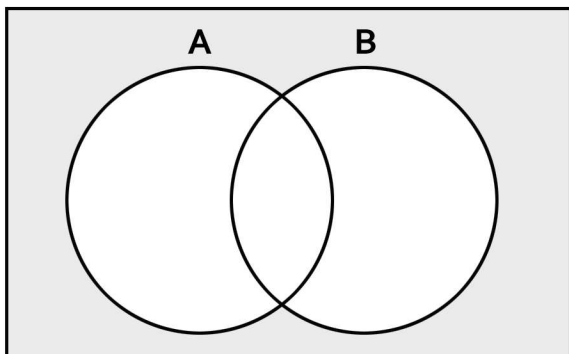
2)  $A: \{20, 1, 15, 12, 11\}$   $B: \{4, 10, 12, 1, 18\}$



5)  $A: \{14, 8, 5, 11, 9\}$   $B: \{14, 4, 17, 8, 0\}$



3)  $A: \{16, 12, 5, 10, 1\}$   $B: \{1, 2, 20, 15, 10\}$



6)  $A: \{2, 12, 6, 17, 18\}$   $B: \{20, 13, 12, 8, 6\}$

