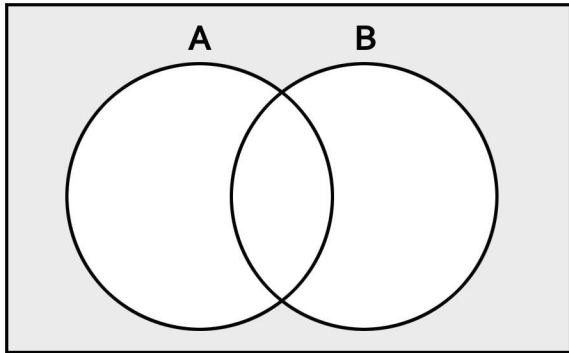


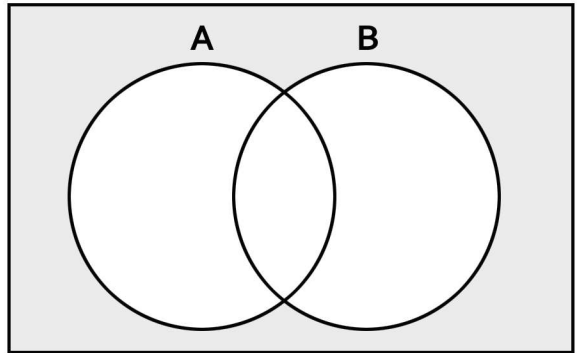
Venn Diagrams

Fill out the Venn diagrams below using the sets A and B given in each problem.

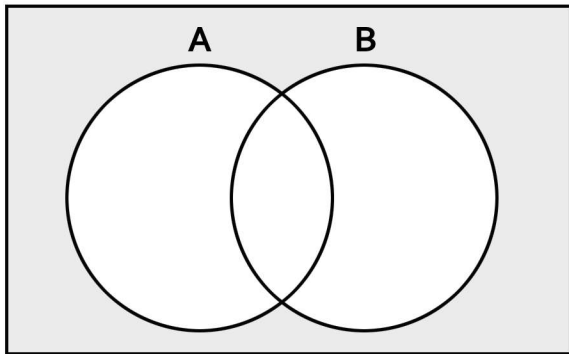
1) $A: \{ 14, 5, 0, 16, 20 \}$ $B: \{ 10, 19, 8, 15, 11 \}$



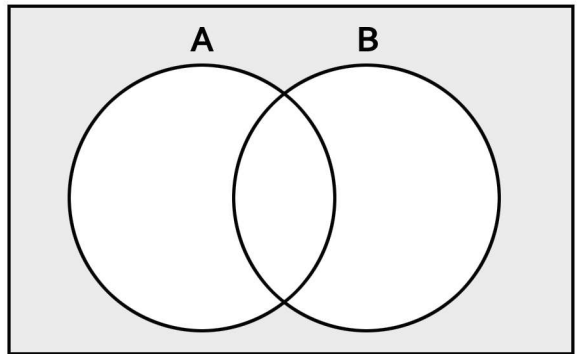
4) $A: \{ 15, 12, 9, 18, 3 \}$ $B: \{ 4, 14, 3, 17, 12 \}$



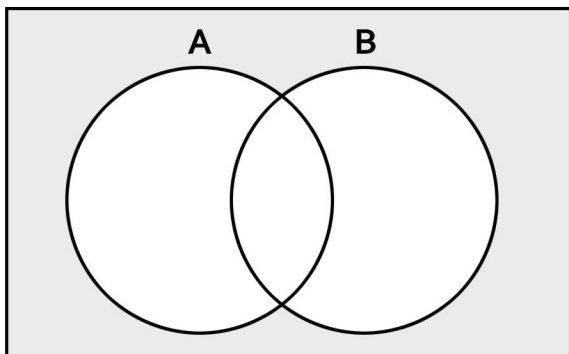
2) $A: \{ 4, 7, 15, 11, 14 \}$ $B: \{ 20, 0, 19, 15, 7 \}$



5) $A: \{ 10, 4, 3, 16, 5 \}$ $B: \{ 5, 11, 4, 16, 2 \}$



3) $A: \{ 1, 5, 18, 6, 11 \}$ $B: \{ 1, 2, 20, 18, 10 \}$



6) $A: \{ 0, 3, 15, 17, 18 \}$ $B: \{ 9, 16, 5, 17, 1 \}$

