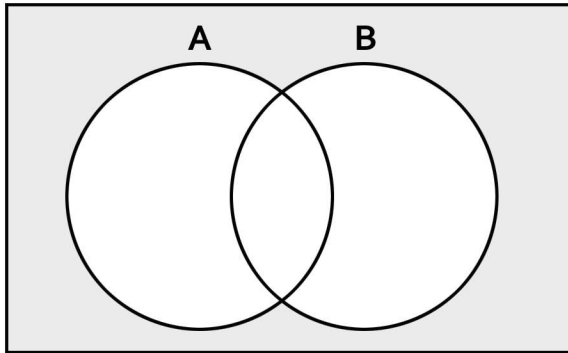


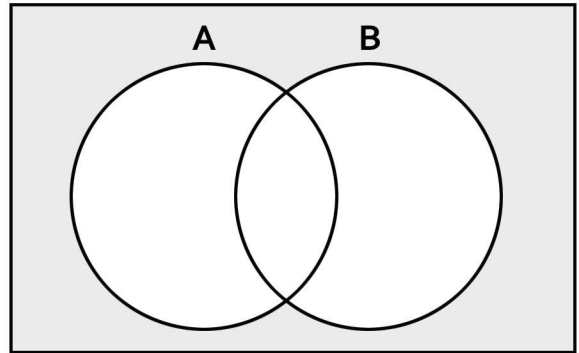
Venn Diagrams

Fill out the Venn diagrams below using the sets A and B given in each problem.

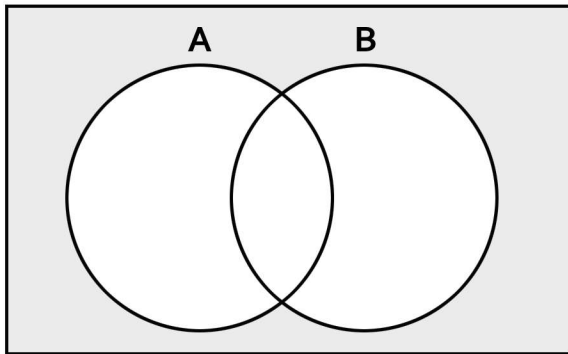
1) $A: \{4, 19, 8, 17, 6\}$ $B: \{13, 16, 19, 20, 2\}$



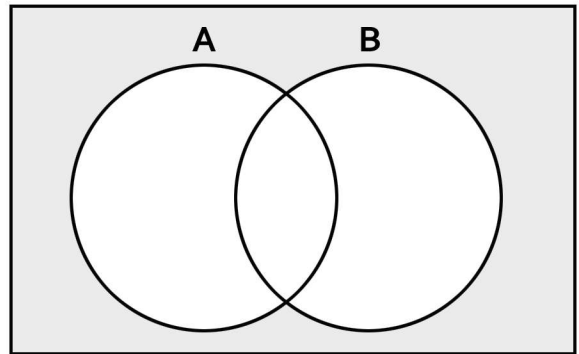
4) $A: \{11, 3, 15, 8, 14\}$ $B: \{6, 14, 5, 11, 18\}$



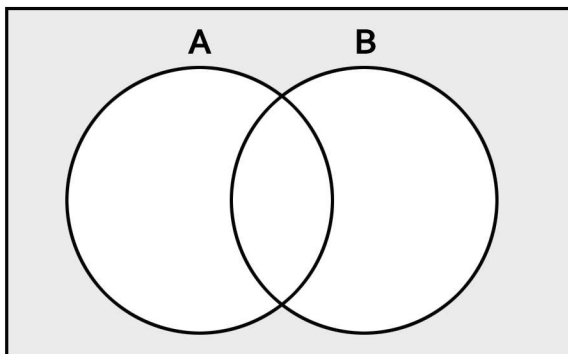
2) $A: \{4, 0, 11, 7, 16\}$ $B: \{9, 7, 15, 0, 16\}$



5) $A: \{20, 12, 1, 6, 16\}$ $B: \{3, 12, 2, 13, 18\}$



3) $A: \{15, 0, 8, 11, 10\}$ $B: \{11, 6, 9, 15, 20\}$



6) $A: \{14, 6, 20, 5, 15\}$ $B: \{19, 5, 7, 3, 14\}$

