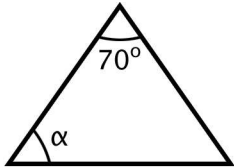


Geometry: Find the Missing Angle in the Triangles (Set 2)

Find the missing angle labelled α (alpha).

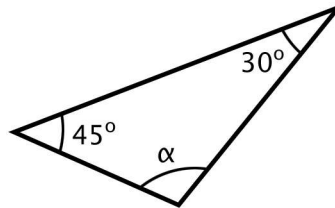


1. Isosceles Triangle



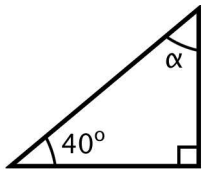
$\alpha =$ _____

2. Scalene Triangle



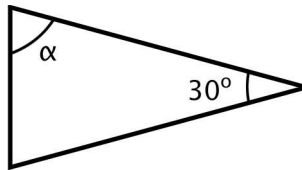
$\alpha =$ _____

3. Right Triangle



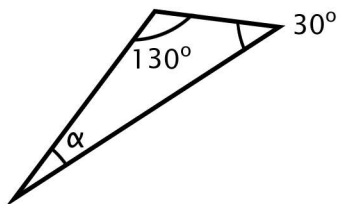
$\alpha =$ _____

4. Isosceles Triangle



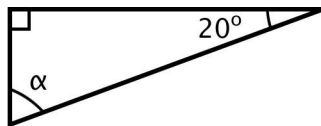
$\alpha =$ _____

5. Scalene Triangle



$\alpha =$ _____

6. Right Triangle



$\alpha =$ _____

Name _____ Date _____

Geometry: Find the Missing Angle in the Triangles (Set 2)

Find the missing angle labelled α (alpha).



1. Isosceles Triangle

55°

2. Scalene Triangle

105°

3. Right Triangle

50°

4. Isosceles Triangle

75°

5. Scalene Triangle

20°

6. Right Triangle

70°