

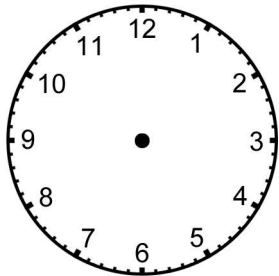
Time Word Problems: Analog Clocks (Set 1)

For each event, write the beginning and ending times under the clocks, then draw the hands on the clocks to match the correct times.

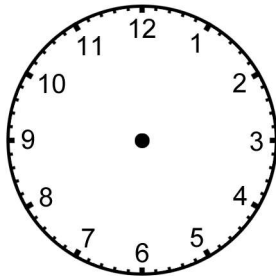


1. Melissa's art class starts at 2:30 and lasts for 2 hours.

BEGIN

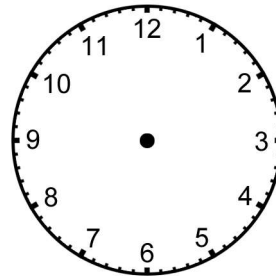


END

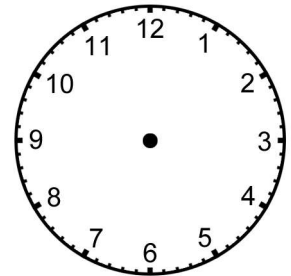


2. Greg met his grandparents for dinner at 6:30. They ate for 30 minutes.

BEGIN

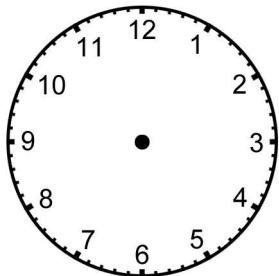


END

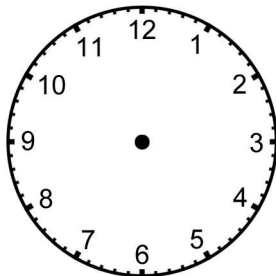


3. Mark washed his car for 2 and a half hours. He finished washing his car at noon.

BEGIN

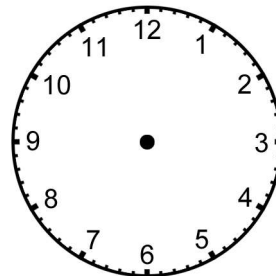


END



4. Amy's band practice starts at 3:15 and lasts an hour and 45 minutes.

BEGIN



END

