

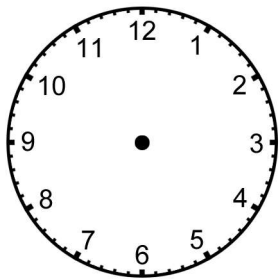
## Time Word Problems: Analog Clocks (Set 2)

For each event, write the beginning and ending times under the clocks, then draw the hands on the clocks to match the correct times.



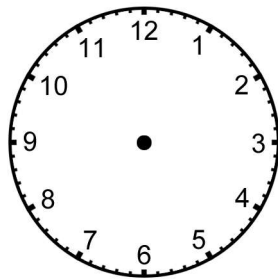
1. Bob's pottery class was over at 1:30. His class lasted for 2 hours.

**BEGIN**



\_\_\_\_\_

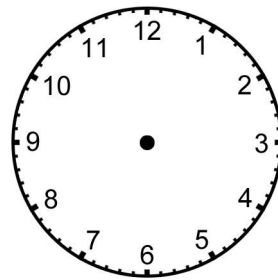
**END**



\_\_\_\_\_

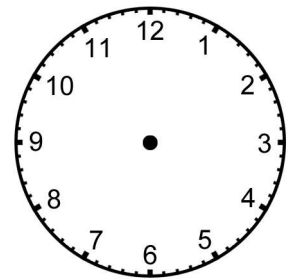
2. Mary met her friend for brunch at 10:30. They left the restaurant 2 hours later.

**BEGIN**



\_\_\_\_\_

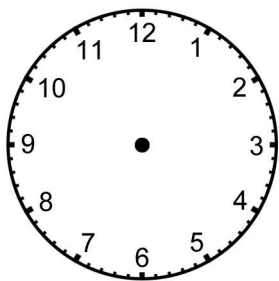
**END**



\_\_\_\_\_

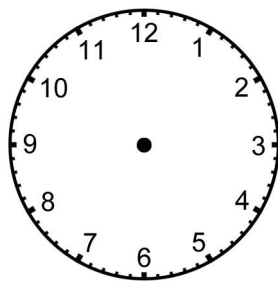
3. Simone studied for 3 hours and was finished at 7:45.

**BEGIN**



\_\_\_\_\_

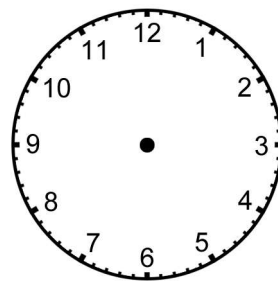
**END**



\_\_\_\_\_

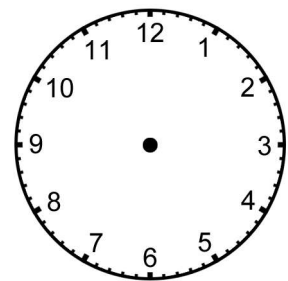
4. Nick left his friend's party at 3:00. He was there for 3 and a half hours.

**BEGIN**



\_\_\_\_\_

**END**



\_\_\_\_\_