

Time Word Problems: Analog Clocks (Set 3)

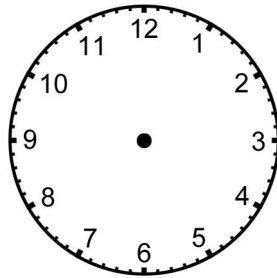
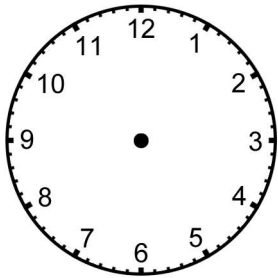


For each event, write the beginning and ending times under the clocks, then draw the hands on the clocks to match the correct times.

1. Barry worked on his science project for an hour and 45 minutes. He finished at 4:00.

BEGIN

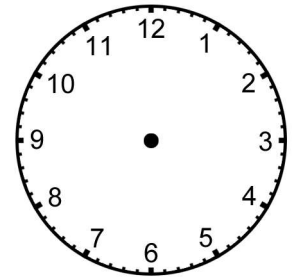
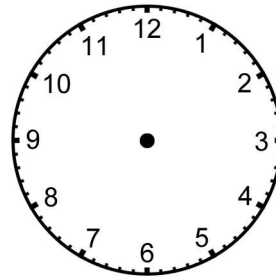
END



2. Cory spent 3 and a half hours building his robot. He started at 10:15.

BEGIN

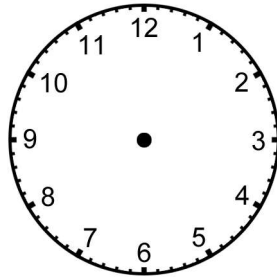
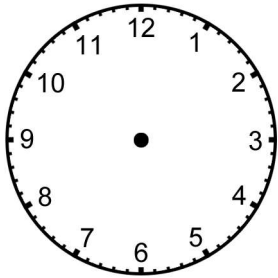
END



3. Erin spent 45 minutes reading a book. She was finished at 6:30.

BEGIN

END



4. Veronica started riding her bike at 11:15. She rode her bike for 2 and a half hours.

BEGIN

END

