

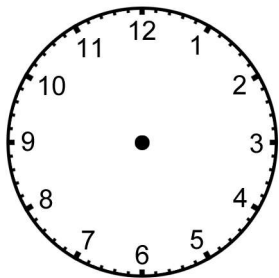
Time Word Problems: Analog Clocks (Set 4)



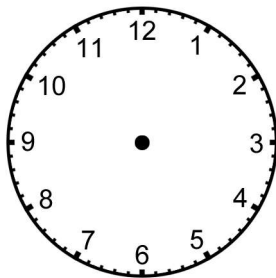
For each event, write the beginning and ending times under the clocks, then draw the hands on the clocks to match the correct times.

1. Brandy has gymnastics class at 4:15 and it last for an hour and a half.

BEGIN

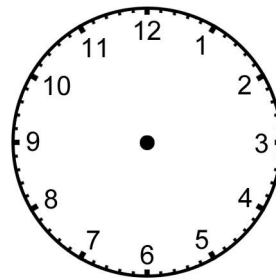


END

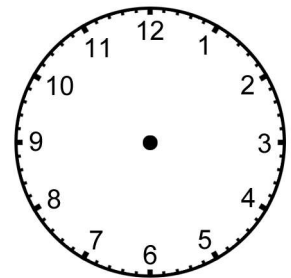


2. Danny spent 45 minutes buying groceries and was finished at 1:30.

BEGIN

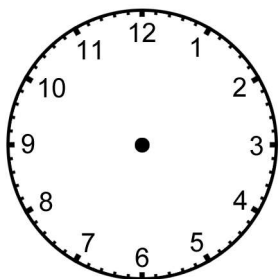


END

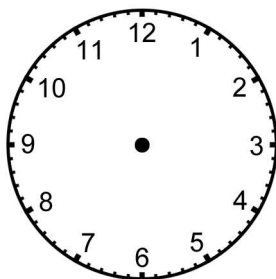


3. Angele began her experiment at 1:45. She completed it in 3 hours and 30 minutes.

BEGIN

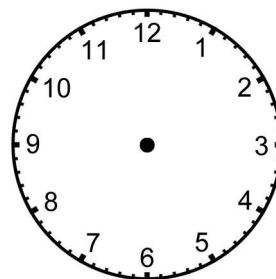


END



4. Jack ran up the hill in 30 minutes. He started running at 12:45.

BEGIN



END

